

DO NOT OPEN THE SEAL OF THE BOOKLET UNTIL YOU ARE TOLD TO DO SO

EXAM ID. - 6605

SSC CHSL

TEST SERIES

DATE - __/__/__

DAY -

INSTRUCTION FOR CANDIDATE

TEST SERIES NO.

A - 101

QUESTION – 100

MARKS – 200

NEGATIVE MARK – 0.50

DURATION –60 MIN.

1. Use only ball pens with black or blue ink
2. As soon as the examination starts, you must check this question booklet and if there is any unprinted, mutilated or partially printed page or question in it, then replace it with the correct question booklet through Abhijagar.
3. There are total 100 questions in this question booklet.
4. This is an objective test, in which four options are given for the answer to each question, you have to choose only one option with the correct answer out of these four options.
5. Answers to all questions are to be written on separate answer sheets.
6. Instructions for filling the answer sheet are written on the back side of the answer sheet, read them carefully before filling the answer sheet.
7. Blank pages are available in this question booklet for rough work.
8. Candidates cannot leave the room before the end of the examination.
9. After the examination is over, you can go out with his permission by submitting the ORIGINAL COPY of the answer sheet to the invigilator.
10. After the completion of the examination, the candidate is allowed to take the question booklet and answer sheet with him/her.
11. 2 marks will be given for each correct answer and 0.50 marks will be deducted for each wrong answer.



**YOUR BRAND LOGO
HERE**

YOUR INSTITUTE NAME

Address- Your coaching institute full address

Helpline :- 7737404085, 8209244090

ENGLISH

1. Direction: Question consists of a sentence with an underlined word followed by four words. Select the option that is opposite in meaning to the underlined word and mark your answer.
The sky is boundless.
- (a) High (b) Vast
(c) Expansive (d) Finite
2. Direction: Question consists of a sentence with an underlined word followed by four words. Select the option that is opposite in meaning to the underlined word and mark your answer.
He found her extremely attractive and charming.
- (a) Unnatural (b) Modern
(c) Repulsive (d) Disapproving
3. (3 – 7) Direction: In the following passage, some words have been deleted. Select the most appropriate option to fill in each blank.
Christmas is one of the most famous and light-hearted festivals which is ___(1)___ across the world by billions of people. People of the Christian religion celebrate Christmas to ___(2)___ the great works of Jesus Christ. 25th December is celebrated as Christmas Day ___(3)___ the world. Christians celebrate Christmas Day as the birth anniversary of Jesus Christ. Jesus Christ of Bethlehem was a spiritual leader and prophet whose teachings ___(4)___ the premise of their religion. People ___(5)___ popular customs including exchanging gifts, decorating Christmas trees, attending church, sharing meals with family and friends, and, obviously, trusting that Santa Claus will arrive. 25th December, Christmas Day, has been a federal holiday in the United States since 1870.
Select the most appropriate option to fill in blank number 1.
- (a) Celebrated (b) Complicated
(c) Abducted (d) Protected
4. Select the most appropriate option to fill in blank number 2.
- (a) Order (b) Listener
(c) Remember (d) Viewer
5. Select the most appropriate option to fill in blank number 4.
- (a) Ensure (b) Structure
(c) Secure (d) Figure
6. Select the most appropriate option to fill in blank number 5.
- (a) Allow (b) Disallow
(c) Fallow (d) Follow
7. Select the most appropriate option to fill in blank number 3.
- (a) Aimless (b) Address
(c) Recess (d) Across
8. Direction: Given below idioms/phrases followed by four alternative meanings to each. Choose whichever is the most appropriate meaning and mark your answer.
Overstep the mark
- (a) To tell people how successful you are (b) To step into someone else's areas of expertise
(c) To upset someone by doing/saying more than you should (d) To do something in an excited way
9. Direction: Given below idioms/phrases followed by four alternative meanings to each. Choose whichever is the most appropriate meaning and mark your answer.
Palsy-walsy friends
- (a) Good friends (b) Friends who help each other in difficult situations
(c) Friends by choice, and not by chance (d) Unfriendly
10. Direction: Given below are four sentences in jumbled order. Pick the option that gives their correct order.
A. The zip on the bag got jammed and wouldn't open no matter how hard I pulled at it.
B. We were flying to England for a week.
C. I also remembered that I had put the frequent flyer card in the carry-on bag hanging around my neck.
D. As we were checking in, I remembered that I was a member of the frequent flyer programme.
- (a) BDCA (b) ABDC
(c) BACD (d) DBAC
11. Direction: Choose the option that is the indirect form of the sentence.
Vandana said, "I'm being dropped to office today".
- (a) Vandana said that she should be dropped to office today. (b) Vandana said that I am being dropped to office on that day.
(c) Vandana said that she was being dropped to office that day. (d) Vandana said she was dropped to office today.
12. Direction: Choose the appropriate word to fill in the blank.
She was the _____ of all eyes at the party.
- (a) pride (b) limelight
(c) star (d) cynosure
13. Direction: In the following sentences is divided into three parts a, b & c. Some of the sentences have errors in one part and some have none. Find out which part of the sentence has an error.
My sister and her husband (a) / broke out (b) / When they heard the bad news. (c) / (d) No error.
- (a) (a) (b) (b)
(c) (c) (d) (d)

14. Direction: Select the most appropriate synonym of the given word.

Abscond

- (a) Flee (b) Come
(c) Evict (d) Remain

15. Direction: Select the most appropriate synonym of the given word.

Persecution

- (a) Perfection (b) Affliction
(c) Stimulation (d) Oppression

16. Direction: In the following question, out of the given alternatives, choose the one which can be substituted for the given words/sentence.

An imaginary ideal society

- (a) Model (b) Ultimate
(c) Utopia (d) Flawless

17. Choose the correctly spelt word.

- (a) Asspersion (b) Voluptuous
(c) Voguei (d) Equestrain

18. Direction: Choose the option that is the active form of the sentence.

The politician's speech was loudly cheered.

- (a) The audience cheer the politician's loud speech. (b) The audience was loudly cheered by the politician's speech.
(c) The audience loudly cheered the politician's speech. (d) The audience had been loudly cheered by the politician.

19. Direction: Choose the appropriate word to fill in the blank.

A _____ of seagulls flew over the ship screeching raucously.

- (a) drove (b) fleet
(c) bunch (d) flock

20. Choose the miss-spelt word.

- (a) Fatuous (b) Obituary
(c) Mortury (d) Congress

21. Direction: In the following question, out of the four alternatives, select the alternative which will improve the underlined part of the sentence. In case no improvement is needed, select "No improvement".

Sneha agrees that her older brother is much clever than her.

- (a) her older brother is much clever to her (b) her elder brother is much clever to
(c) her elder brother is much clever than (d) No improvement

22. Direction: In the given question, a part of the sentence is made bold. Below are given alternatives to the bold part at (A), (B), and (C) which may improve the sentence. Choose the correct alternative. In case no replacement is needed, mark (D) as your answer.

The accumulated dust on the furnitures indicated that the family were long gone.

- (a) furnitures indicated that the family were (b) furnitures indicated that the family was
(c) furniture indicated that (d) No replacement required the family was

23. Direction: Given here are four sentences. The first sentence is in the correct order. Pick the option that gives the correct order.

A. In the late 1930s, American foreign policy in the Pacific hinged on support for China, and aggression against

B. China by Japan therefore necessarily would bring Japan into conflict with the United States.

C. As early as 1931 the Tokyo government had extended its control over the Chinese province of Manchuria, and the following year

D. the Japanese cemented their hold on the region with the creation of the puppet state of Manchukuo.

- (a) ABCD (b) ACBD
(c) ADBC (d) ADCB

24. Direction: In the following question, out of the given alternatives, choose the one which can be substituted for the given words/sentence. The extreme fear of time or time passing

- (a) Cellophobia (b) Claustrophobia
(c) Chronophobia (d) Centrophobia

25. Direction: Fill in the blank with a suitable adjective from those given in the options.

Tammy is _____ than Ashish, even if Ashish is very muscular.

- (a) heavy (b) more heavy
(c) heavier (d) heaviest

REASONING

26. If 'A' means '+', 'B' means '-', 'C' means '÷' and 'D' means 'x', then which of the following equation is correct?

- (a) $5D14C28A12 = (-2)$ (b) $22D2C4A11 = 33$
(c) $56C28D17B36 = (-2)$ (d) $14D2B18A19 = 6$

27. Direction: Find the number of triangles in the given figure.



- (a) 16 (b) 20
(c) 24 (d) 32

28. Which of the following sets of signs should be used to replace * in the following?

$$7 * 8 * 6 = 225 * 9 * 25$$

- (a) $\times - \div +$ (b) $\times \div \times +$
(c) $+ \times \div -$ (d) $+ \times \times +$

29. It was Monday on 1 January 2018. Then 1 January 2019, falls on:

- (a) Tuesday (b) Wednesday
(c) thursday (d) Saturday

30. Choose the option that most closely resembles the mirror image of the given figure when mirror is placed at left side.

प्रश्न आकृति



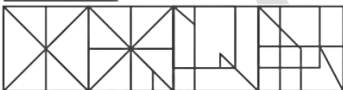
- (a) (b)
(c) (d)

31. Arrange the following words according to the English dictionary arrangement.

- (a) preemptory
(b) perceptible
(c) perceptual
(d) perforation
(e) percentile

- (a) (e), (c), (b), (d), (a) (b) (e), (b), (c), (a), (d)
(c) (e), (c), (b), (a), (d) (d) (e), (b), (c), (d), (a)

32. From the given answer figures, select the one in which the question figure is hidden/embedded?



- (a) a (b) b
(c) c (d) d

33. Direction: In the following question, select the related numbers from the given alternatives.

62 : 155 :: 58 : ?

- (a) 131 (b) 148
(c) 145 (d) 256

34. Direction: A piece of paper is folded and punched as shown below in the question figures. From the given answer figures, how will it appear when opened?



- (a) (b)
(c) (d)

35. Xe is father of Fr. Fr is married to Za. Gr is son of Za. How is Fr related to Gr?

- (a) Mother (b) Father
(c) Either mother or Father (d) Brother

36. Direction: The following equation is incorrect. Which two signs should be interchanged to correct the equation?
 $18 \div 2 \times 4 + 10 - 2 = 25$

- (a) \div और $-$ \div and $-$ (b) $+$ और \div $+$ and \div
(c) $-$ और $+$ $-$ and $+$ (d) \times और $-$ \times and $-$

37. The ratio of the present ages (in years) of father and son is 15:8. Six years ago, the ratio of their ages was 13:6. What is the present age of the father?

- (a) 45 years (b) 58 years
(c) 65 years (d) 78 years

38. Read the given statements and conclusions carefully. Assuming that the information given in the statements is true, even if it appears to be at variance with commonly known facts, decide which of the given conclusions logically follow(s) from the statements.

Statements:

Some cards are postcards.

Some cards are envelopes.

All envelopes are copies.

Conclusions:

I. Some copies are envelopes.

II. Some postcards are copies.

III. Some cards are copies.

- (a) Only conclusions I and II follow (b) Only conclusions II and III follow
(c) Only conclusion I follows (d) Only conclusions I and III follow

39. Direction: In the following question, select the related numbers from the given alternatives.

86 : 62 :: 49 : ?

- (a) 29 (b) 49
(c) 35 (d) 42

40. In a code language, if SECRETE is written as 1922318222022 and SOUND is written as 19126144, then how will NOISE be written in the same language?

- (a) 1312181920 (b) 141514195
(c) 1412181922 (d) 1415182922

41. Find the odd letter pair from the given alternatives.

- (a) HIUL (b) QIEM
(c) ZOIV (d) TEAP

42. If '@' means 'addition', '%' means 'multiplication', '\$' means 'division' and '#' means 'subtraction', then find the value of the following expression.
29 @ 128 \$ 16 % 7 # 22

- (a) 47 (b) 58
(c) 63 (d) 23

43. Direction: What should come in place of the question mark '?' in the following number series?
7, 9, 13, 21, 37, _____

- (a) 58 (b) 63
(c) 69 (d) 72

44. Direction: What should come in place of the question mark '?' in the following number series?
5, 9, 10, 28, 17, 65, _____

- (a) 32 (b) 26
(c) 78 (d) 93

45. Direction: A series is given with one term missing. Select the correct alternative from the given ones that will complete the series.
ABC, EFG, IJK, ?, QRS

- (a) KLM (b) MNP
(c) MNO (d) LMN

46. Direction: A series is given with one term missing. Select the correct alternative from the given ones that will complete the series.
DKY, FJW, HIU, JHS, ?

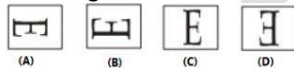
- (a) LGQ (b) KGR
(c) KFR (d) LFQ

47. Direction: Find the mirror image of the following question figure.

Question figure:



Answer figure:

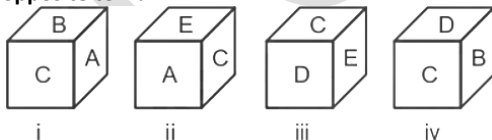


- (a) (A) (b) (B)
(c) (C) (d) (D)

48. In a code language, SKILLS is written as HPROOH. How will PLACES be written in that language?

- (a) KOZXVH (b) KOBXVG
(c) LOZXVI (d) KPZXUH

49. Four positions of dice are given below. Which letter is opposite to D?



- (a) D (b) A
(c) B (d) C

50. Direction: Identify the diagram that best represents the relationship among classes given below:
Apple, Fruit, Banana



(a)



(b)



(c)



(d)

Quantitative Aptitude

51. The selling price of article A is Rs 144. If the profit percentage is equal to the cost price of the article, then what is the cost price of the article?

- (a) 80 (b) 60
(c) 90 (d) 120

52. A student has to obtain 40% of the total marks to pass. He has got 150 marks and has failed by 50 marks. What are the maximum marks?

- (a) 500 (b) 550
(c) 480 (d) 520

53. If the seven-digit number $161x208$ is divisible by 11 and the four-digit number $953y$ is divisible by 9, then what is the value of $(x + y)$?

- (a) 7 (b) 8
(c) 10 (d) 12

54. Simplify the expression $45 - [36 - \{29 - (25 - \overline{7 + 4})\}]$.

- (a) 24 (b) 22
(c) 26 (d) 28

55. If a metallic cone of radius 24 cm and height 48 cm is melted and converted into a metallic sphere of radius 6 cm, find the number of such spheres.

- (a) 32 (b) 42
(c) 48 (d) 24

56. If $\sin^4 x + 2 \cos^4 x = \frac{2}{3}$, then what is the value of $\sec^2 x$?

- (a) 2 (b) 3
(c) 1 (d) 4

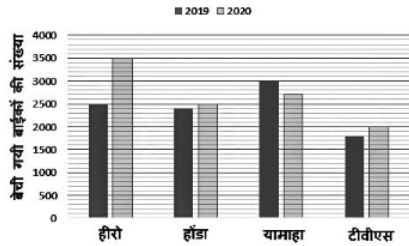
57. The speed of a boat in still water is eight times the speed of the stream. The boat takes 18 hours to cover a distance of 315 km downstream and 385 km upstream. So, how much time will the boat take to cover a distance of 225 km downstream?

- (a) 4 hours (b) 5 hours
(c) 9 hours (d) 6 hours

58. Instructions: Study the information given below and answer the following question.

The following line graph shows the literate and illiterate population of five villages.

The bar graph shows the number of bikes sold by 4 companies in 2019 and 2020.



What is the difference between the average of bikes sold by Hero and TVS together in 2020 and the average of bikes sold by Honda and Yamaha together in 2019?

- (a) 150 (b) 100
(c) 70 (d) 50
73. An alloy contains gold and copper in the ratio 3:4. In the second alloy gold and copper are in the ratio 5:3. In what ratio should they be mixed so that the ratio of gold and copper in the final mixture we get is 5:4?
- (a) 17 :32 (b) 9 :16
(c) 71 :128 (d) 35 :64
74. Eight members of a club donate Rs 1000 per member to a relief fund. The club president donates Rs 500 more than the average donation (including the president). Then, the amount donated by the Chairman is.
- (a) Rs 1062.5 (b) Rs 1562.5
(c) Rs 562.5 (d) Rs 2062.5
75. 20 men and 15 boys can do a piece of work in 10 days. 25 men and 10 boys can do it in 9 days. Find the ratio of the daily work done by a boy to the daily work done by a man.
- (a) 5 :12 (b) 5:14
(c) 12 :5 (d) 14 :5

General Awareness

76. Leela Samson is associated with which classical dance form?
- (a) Bharatanatyam (b) Kuchipudi
(c) Odyssey (d) Kathakali
77. Military commanders who were given territories to govern in Vijayanagara were called:
- (a) Rayas (b) Amirs
(c) Amara - Nayakas (d) None of the above
78. The Government is Planning to Launch the PM PRANAM Scheme. It is related to which of the following issues?
- (a) Reduce the use of chemical fertilisers (b) Promote the use of Renewable source of energy
(c) Promote electric vehicles (d) Reduce the pollution from coal-based power plants

79. The Palk Strait lies between the countries:
- (a) Sri Lanka and Maldives (b) India and Sri Lanka
(c) India and Maldives (d) Indonesia and Maldives
80. Which of the following substances will react with chlorine gas to form another substance that is soluble in water and its aqueous solution conducts electricity?
- (a) Sulphur (b) Silicon
(c) Graphite (d) Magnesium
81. The Human Development Index (HDI) is published by the _____.
- (a) World bank (b) UNDP
(c) IMF (d) NITI Aayog
82. India has voted in favour of a UNSC resolution on the mental health of UN peacekeepers. Which country initiated the draft resolution?
- (a) Mexico (b) USA
(c) Brazil (d) Poland
83. A quantity is said to be scalar if it is completely defined by its _____.
- (a) magnitude only (b) direction only
(c) both magnitude and direction (d) shape only
84. The last governor-general of the United Province and the first governor of Uttar Pradesh were the same person. Who was he?
- (a) Justice B.B Malik (b) Kanhaiyalal Maneklal Munshi
(c) Sir Maurice Garnier Hallett (d) Hormasji Pherozeshah Modi
85. When the Bundela Rebellion take place in Madhya Pradesh?
- (a) 1942 (b) 1842
(c) 1930 (d) 1830
86. Which of the following is a gallantry award?
- (a) Iqbal Samman (b) Dronacharya Award
(c) Paramveer Chakra (d) Bharat Ratna
87. Which of the following region in India represents a Biodiversity Hotspot?
- (a) Western Himalayas (b) Eastern Ghats
(c) Central Plateau (d) Western Ghats
88. Which of the following is the file extension of MS Excel?
- (a) .xlsx (b) .els
(c) .exl (d) .exis
90. Who among the following was popularly known as "Surma Bhopali"?
- (a) Manik Verma (b) Rahat Indori
(c) Jagdeep (d) Radheshyam Sharma

- 91. The Book of Thel is a poem composed by _____.**
(a) John Milton (b) Shakespeare
(c) William Blake (d) Alexander Pope
- 92. The most famous centre of learning during Maurya period was:**
(a) Taxila (b) Ujjain
(c) Nalanda (d) Vallabhi
- 93. Which is India's first biosphere protected area?**
(a) Nanda Devi (b) Sunderban
(c) Nilgiri (d) Great Nikobar
- 94. Which of the following parts of the body/glands maintains the body temperature?**
(a) Thyroid (b) Pituitary
(c) Adrenal (d) Hypothalamus
- 95. Which one of the following features is not a feature of the industrial strike?**
(a) A collective act involving a certain amount of solidarity
(b) A collective act to express grievances
(c) The stoppage of work by a worker
(d) A regulated form of industrial conflict
- 96. The Fourth Schedule of the Indian Constitution tells about which of the following option?**
(a) Salaries of the Member (b) Union and its Territory
(c) Allocations of Rajya Sabha Seats (d) None of these
- 97. Which shortcut key is used to find a particular word in a Word document?**
(a) CTRL + S (b) CTRL + F
(c) CTRL + R (d) CTRL + Y
- 98. Which of the following Vehicles will be Exempted from the Green tax, recently announced by Ministry of Road Transport and Highways?**
(a) Electric vehicles (b) CNG, ethanol and LPG fuel based Vehicles
(c) Farming vehicles (d) All of the above
- 99. The Historic Chandragiri Fort is situated in which State?**
(a) Andhra Pradesh (b) Tamil Nadu
(c) Jharkhand (d) Maharashtra
- 100. Who is the first Indian male badminton player to reach the final of BWF World Badminton Championships?**
(a) K. Srikanth (b) Parupalli Kashyap
(c) Sai Praneeth (d) Nandu Natekar